



Bohr Diagrams of Common Ions


Complete the information card for each of the specified elements.




Symbol: N^{3-}
of P: _____
of N: _____
of E: _____




Symbol: Na^+
of P: _____
of N: _____
of E: _____




Symbol: _____
of P: 17
of N: _____
of E: 18




Symbol: Ca^{2+}
of P: _____
of N: _____
of E: _____




Symbol: C
of P: _____
of N: _____
of E: _____




Symbol: Be^{2+}
of P: _____
of N: _____
of E: _____



Symbol: _____
of P: 10
of N: _____
of E: _____



Symbol: _____
of P: 13
of N: _____
of E: 10



Symbol: Li^+
of P: _____
of N: _____
of E: _____

●

Symbol: P³⁻
of P: _____
of N: _____
of E: _____

●

Symbol: _____
of P: 19
of N: _____
of E: 18

●

Symbol: Si
of P: _____
of N: _____
of E: _____

●

Symbol: Ar
of P: _____
of N: _____
of E: _____

●

Symbol: O²⁻
of P: _____
of N: _____
of E: _____

●

Symbol: _____
of P: 2
of N: _____
of E: 2

●

Symbol: _____²⁺
of P: _____
of N: _____
of E: 10

●

Symbol: _____²⁻
of P: _____
of N: _____
of E: 18

●

Symbol: _____
of P: 5
of N: _____
of E: 2