



Name _____

Period _____ Date _____

Station Model Lab

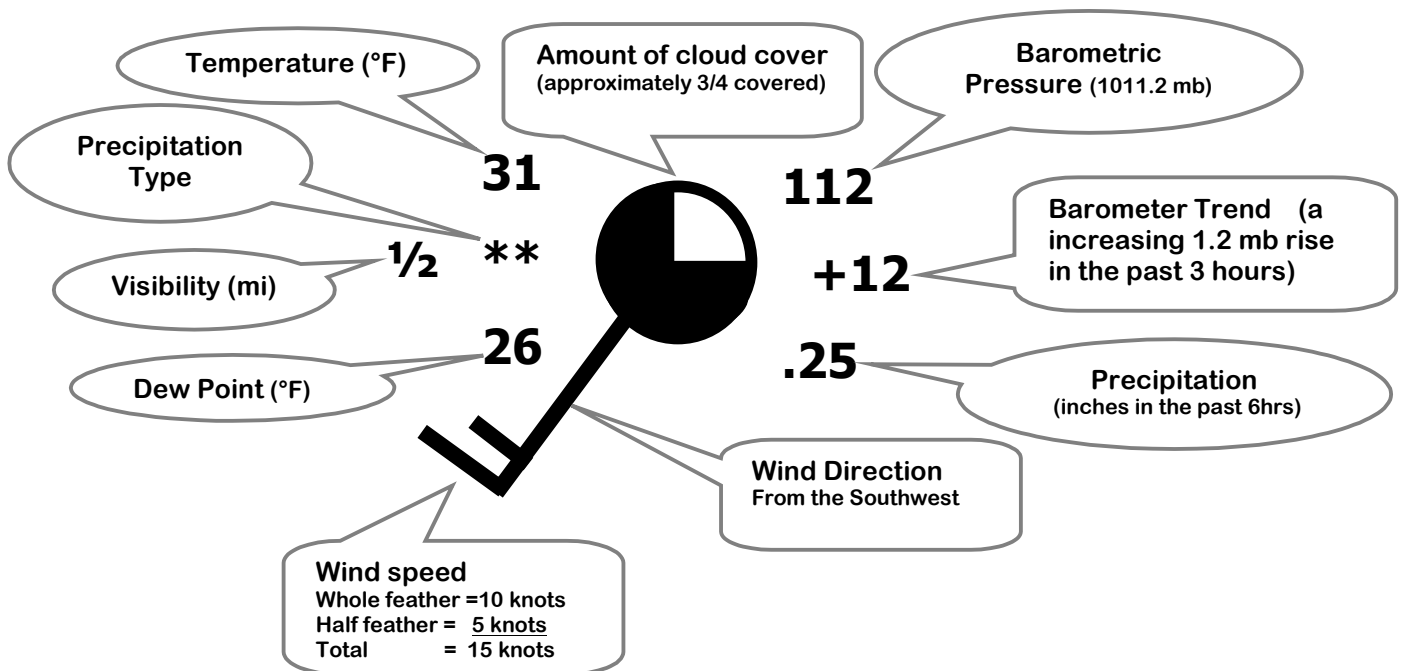
At commercial airports throughout the country the weather is observed, measured and recorded. In New York State alone there are over a dozen observation sites. These stations record: temperature, dew point, cloud cover, visibility, height of cloud base, amount of precipitation, wind speed and wind direction to name a few. The measurements made every hour at every station around the world. This is a very large amount of data, which can be very useful in predicting the weather.

The challenge is that a large amount of data needs to be communicated

to every weather station in the US. Because of the lack of space on weather maps, the weather information needs to be coded. In order to do this the information needs to be highly organized and standard throughout country. By using station models the data can be represented by a symbol or number, and it's meaning is easily understood by where the symbol or number is placed on the station model.

Through this lab you will learn to understand station models used in meteorology by coding and decoding a variety of stations.

WEATHER MAP INFORMATION STATION MODEL



Procedures

Air Pressure: when coding air pressure on a station model, use the following rule:

- if the air pressure on the station model is 500 or more, place a 9 in front of this number. Also put a decimal point in front of the last number EX: 588-- 958.8 millibars
- if the air pressure number on the station model is less than 500 add a 10 in front of the number. Also put a decimal point in front of the last number EX: 091=1009.1 millibars

Past Pressure: When calculating the air pressure for three hours previous use the following rule:

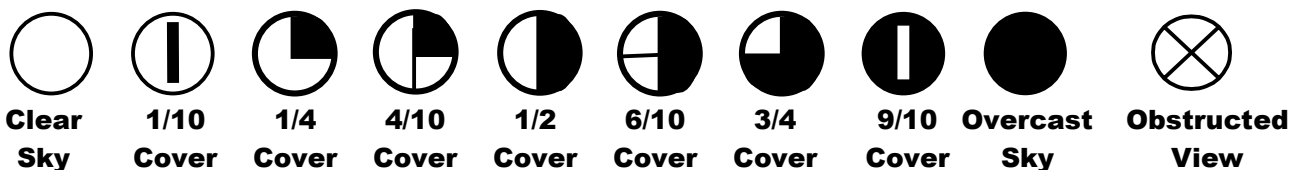
- if the station model displays a + some number there was an increase in the barometric pressure. Place a decimal between the 2 digits and subtract the number from the current air pressure to get the pressure from 3 hours ago. EX +12= 1.2 mb increase so the past pressure is **lower** by 1.2 mb.
- if the station model displays a - some number there was a decrease in the barometric pressure. Place a decimal between the 2 digits and add the number to the current air pressure to get the pressure from 3 hours ago. EX -24= 2.4 mb decrease so the past pressure is **higher** by 1.2 mb.
-

Temperature and Dew point: Are always reported in degrees Fahrenheit (°F) these may need to be converted to degrees Celsius (°C) using the ESRT

Wind direction is measured by where the wind originates. The stick of the station models points in the direction of where the wind comes from. The flags on the stick approximate the speed of the wind, a short flag: 5 knots, a long flag 10 knots and triangle is 50 knots. A knot equals 1.85km/hr or 1.2 mph

Cloud cover is determined by how much of the visible sky is filled with clouds. It is usually done in estimates of 10ths. AN obstructed view is when the observer, for some reason, could not see the sky... like at night.

Cloud Cover Symbols



Precipitation may fall to the earth in many different forms. The form is indicated by a symbol shown below. The water equivalent (the water or melted form of the precipitation) for the last three hours is reported in the station model using inches.

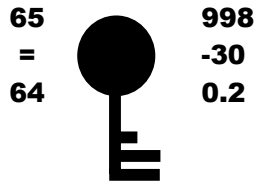
Precipitation Symbols:



Part 1

Using the station models below, decode the weather conditions and record the information displayed in the following table:

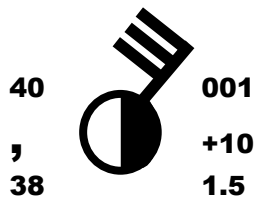
Station 1



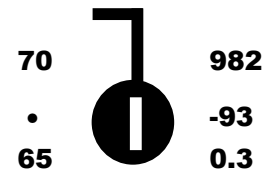
Station 2



Station 3



Station 4



Station 5




Weather Element	Station 1	Station 2	Station 3	Station 4	Station 5
Temperature (°C)					
Temperature (°F)					
Barometric Pressure (mb)					
Precipitation Type					
Percent of Sky covered by clouds					
Wind Direction					
Wind Speed (Knots)					
The pressure three Hours ago? (nb)					

Part 2:


In the chart below, you find meteorological data that was taken at several different New York State airports. Use this data to create station models for each city listed in the table.

City	Temp °F	Dew point	Wind		Air Press.	Sky	Present Weather
			Direction	Speed			
Rochester	69	58	SW	16	1016.9	50%	none
Buffalo	60	45	NE	5	1030.1	10%	none
Syracuse	70	69	SW	20	998.2	25%	drizzle
New York	72	72	W	30	986.4	100%	thunder Storm
Binghamton	71	69	NW	35	999.1	90%	sleet
Albany	32	32	S	10	1000.0	overcast	snow


Rochester




Buffalo




Syracuse




New York



Binghamton



Albany

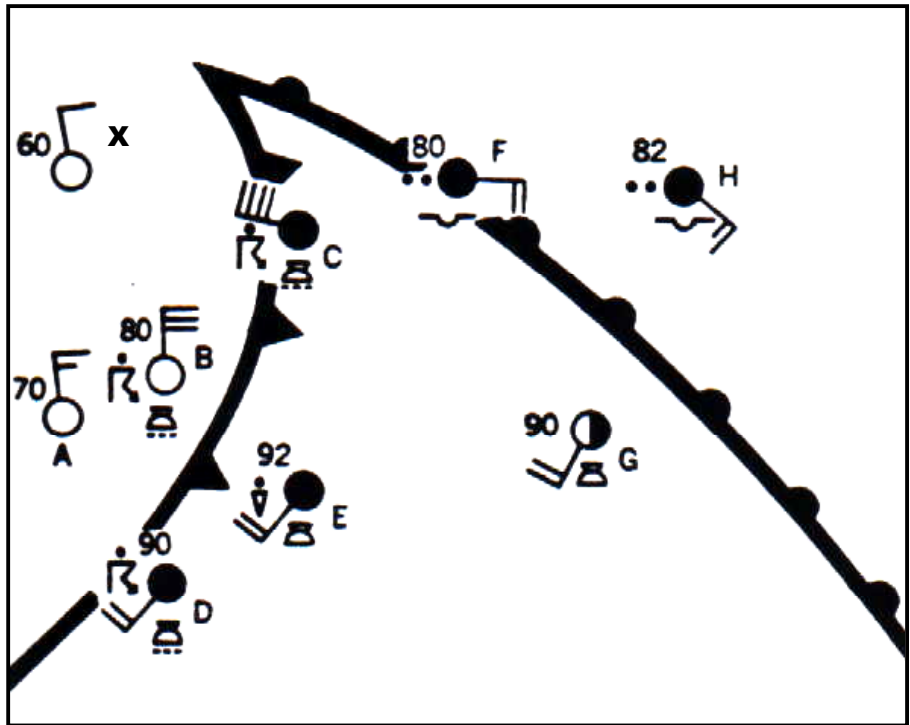


Conclusion:

Study the weather stations shown to the right Write the letter (or letters) of the weather station(s) next to each description of weather conditions.

- a. Wind NW at 40 miles per hour : _____
- b. Wind SE at 15 miles per hour : _____
- c. Overcast : _____
- d. Clear sky : _____
- e. Thunderstorm: _____
- f. Closest to the warm front : _____
- g. Closest to the cold front : _____

Shade the area of the mT air mass in the diagram below:



Matching Questions

On the blank line, write the letter of the item in Column B that is most closely related to the item in column A.

Column A

- _____ 1. Large sections of troposphere with same temperature and humidity
- _____ 2. Boundary between two air masses not moving in relation to each other.
- _____ 3. Warm air mass overtakes cold air mass
- _____ 4. Cold air mass overtakes warm air mass
- _____ 5. Brief local storm with thunder and lightning
- _____ 6. Severe, narrow storm with fast, swirling winds
- _____ 7. Large, tropical cyclone with heavy rains and winds
- _____ 8. severe storm with precipitation of snow and ice

Column B

- a. warm front
- b. winter storm
- c. occluded front
- d. hurricane
- e. stationary front
- f. cold front
- g. air mass
- h. tornado
- i. thunderstorm